

JEE-MAIN EXAMINATION – JANUARY 2026

(HELD ON THURSDAY 22ND JANUARY 2026)

TIME : 9:00 AM TO 12:00 NOON

CHEMISTRY

TEST PAPER WITH SOLUTION

SECTION-A

51. Consider the transition metal ions Mn^{3+} , Cr^{3+} , Fe^{3+} and Co^{3+} and all form low spin octahedral complexes. The correct decreasing order of unpaired electrons in their respective d-orbitals of the complexes is

- (1) $\text{Cr}^{3+} > \text{Fe}^{3+} > \text{Co}^{3+} > \text{Mn}^{3+}$
- (2) $\text{Mn}^{3+} > \text{Fe}^{3+} > \text{Co}^{3+} > \text{Cr}^{3+}$
- (3) $\text{Fe}^{3+} > \text{Co}^{3+} > \text{Mn}^{3+} > \text{Cr}^{3+}$
- (4) $\text{Cr}^{3+} > \text{Mn}^{3+} > \text{Fe}^{3+} > \text{Co}^{3+}$

Ans. (4)

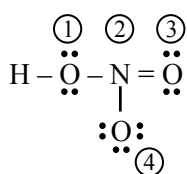
Sol. $\text{Co}^{3+} \rightarrow 3d^6 \Rightarrow t_{2g}^{2,2,2} e_g^{0,0}$, unpaired electron = 0

$\text{Fe}^{3+} \rightarrow 3d^5 \Rightarrow t_{2g}^{2,2,1} e_g^{0,0}$ unpaired electron = 1

$\text{Cr}^{3+} \rightarrow 3d^3 \Rightarrow t_{2g}^{1,1,1} e_g^{0,0}$ unpaired electron = 3

$\text{Mn}^{3+} \rightarrow 3d^4 \Rightarrow t_{2g}^{2,1,1} e_g^{0,0}$ unpaired electron = 2

52. The formal charges on the atoms marked as (1) to (4) in the Lewis representation of HNO_3 molecule respectively are



(1) +1, 0, 0, -1

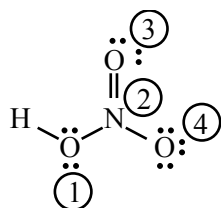
(2) 0, -1, 0, +1

(3) 0, +1, 0, -1

(4) 0, 0, -1, +1

Ans. (3)

Sol. Consider the structure of HNO_3



1 :- 0

2 :- (+1)

3 :- 0

4 :- (-1)

Formal charge = valence e's - non bonding e's

$$- \left(\frac{\text{bonding electrons}}{2} \right)$$

53. Given below are two statements :

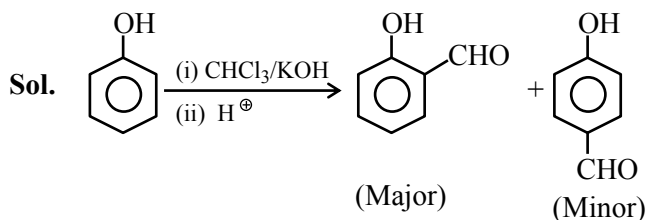
Statement I : Phenol on treatment with $\text{CHCl}_3/\text{aq. KOH}$ under refluxing condition, followed by acidification produces *p*-hydroxy benzaldehyde as the major product and *o*-hydroxy benzaldehyde as the minor product.

Statement II : The mixture of *p*-hydroxybenzaldehyde and *o*-hydroxybenzaldehyde can be easily separated through steam distillation.


In the light of the above statements, choose the **correct** answer from the options given below :

- (1) Both Statement I and Statement II are false
- (2) Statement I is true but Statement II is false
- (3) Both Statement I and Statement II are true
- (4) Statement I is false but Statement II is true

Ans. (4)



(can be separated by steam distillation)



Predict your JEE Main 1 2026 percentile

Try **ALLEN's FREE Percentile Predictor**

Check Now

54. The energy required by electrons, present in the first Bohr orbit of hydrogen atom to be excited to second Bohr orbit is _____ J mol⁻¹.

Given : $R_H = 2.18 \times 10^{-11}$ ergs.

- (1) 1.635×10^{-18}
- (2) 9.835×10^5
- (3) 9.835×10^{12}
- (4) 1.635×10^{-11}

Ans. (2)

Sol. $E_n = -R_H \times \frac{Z^2}{n^2}$

$$\Delta E = 2.18 \times 10^{-11} \times 10^{-7} \times 1^2 \left[\frac{1}{1^2} - \frac{1}{2^2} \right]$$

$$= 1.635 \times 10^{-18} \text{ Joule/atom}$$

$$= 1.635 \times 10^{-18} \times 6.02 \times 10^{23} \text{ Joule/mole}$$

$$= 9.835 \times 10^5 \text{ Joule/mole}$$

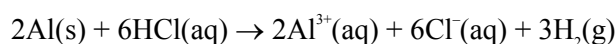
55. A 'p'-block element (E) and hydrogen form a binary cation (EH_x)⁺, while EH₃ on treatment with K₂HgI₄ in alkaline medium gives a precipitate of basic mercury(II)amido-iodine. Given below are first ionisation enthalpy values (kJ mol⁻¹) for first element each from group 13, 14, 15 and 16. Identify the correct first ionisation enthalpy value for element E.

- (1) 1312
- (2) 1086
- (3) 1402
- (4) 801

Ans. (3)

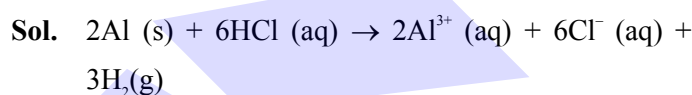
Sol. Element E is N, the species is NH₄⁺, among B, C, N and O, N has highest first ionization energy.

56. In the reaction,



- (1) 11.2 L H₂(g) at STP is produced for every mole of HCl consumed.
- (2) 67.2 L H₂(g) at STP is produced for every mole of Al that reacts.
- (3) 12 L HCl(aq) is consumed for every 6L H₂(g) produced.
- (4) 33.6 L H₂(g) is produced regardless of temperature and pressure for every mole of Al that reacts.

Ans. (1)



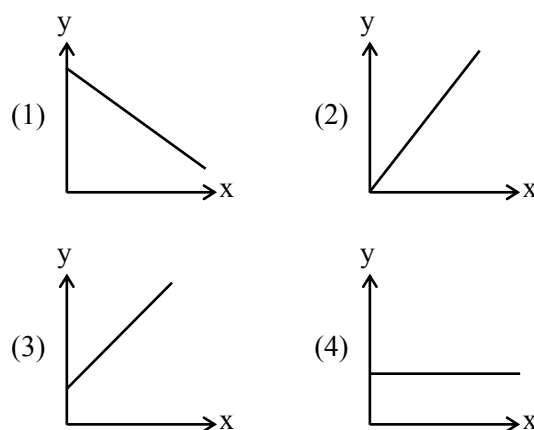
Mole of H₂ produced

= 2 × mole of HCl used


= $\frac{2}{3}$ × mole of Al used

57. Consider a solution of CO₂(g) dissolved in water in a closed container.

Which one of the following plots correctly represents variation of log (partial pressure of CO₂ in vapour phase above water) [y-axis] with log (mole fraction of CO₂ in water) [x-axis] at 25°C ?



Ans. (3)



Predict your JEE Main 1 2026 percentile

Try ALLEN's FREE Percentile Predictor

Check Now

Sol. From Henry's law :

$$P(g) = K_H \cdot X(g)$$

$$\log P(g) = \log K_H + \log X(g)$$

58. A first row transition metal (M) does not liberate H_2 gas from dilute HCl. 1 mol of aqueous solution of MSO_4 is treated with excess of aqueous KCN and then $H_2S(g)$ is passed through the solution. The amount of MS (metal sulphide) formed from the above reaction is _____ mol.

(1) 2

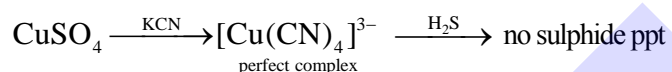
(2) 1

(3) 3

(4) 0

Ans. (4)

Sol. $Cu \xrightarrow{\text{dil. HCl}}$ no reaction



59. The correct order of reactivity of CH_3Br in methanol with the following nucleophiles is

F^- , I^- , $C_2H_5O^-$ and $C_6H_5O^-$

(1) $I^- > C_6H_5O^- > F^- > C_2H_5O^-$

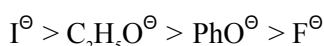
(2) $I^- > C_2H_5O^- > C_6H_5O^- > F^-$

(3) $I^- > C_2H_5O^- > F^- > C_6H_5O^-$

(4) $I^- > F^- > C_6H_5O^- > C_2H_5O^-$

Ans. (2)

Sol. Order of nucleophilicity :



60. Match the LIST-I with LIST-II

List-I Thermodynamic Process		List-II Magnitude in kJ	
A.	Work done in reversible, isothermal expansion of 2 mol of ideal gas from 2 dm ³ to 20 dm ³ at 300 K.	I.	4
B.	Work done in irreversible isothermal expansion of 1 mol ideal gas from 1 m ³ to 3 m ³ at 300 K against a constant pressure of 3 kPa.	II.	11.5
C.	Change in internal energy for adiabatic expansion of a 1 mol ideal gas with change of temperature = 320 K and $\bar{C}_V = \frac{3}{2}R$.	III.	6
D.	Change in enthalpy at constant pressure of 1 mole ideal gas with change of temperature = 337 K and $\bar{C}_P = \frac{5}{2}R$.	IV.	7

Choose the **correct** answer from the option given below :


(1) A-III, B-II, C-IV, D-I

(2) A-II, B-III, C-I, D-IV

(3) A-I, B-II, C-III, D-IV

(4) A-II, B-I, C-III, D-IV

Ans. (2)



Predict your JEE Main 1 2026 percentile

Try ALLEN's FREE Percentile Predictor

Check Now

Option (A)

$$W = -nRT \ln \frac{V_2}{V_1}$$

$$= \frac{-2 \times 8.314 \times 300}{1000} \times \ln \left(\frac{20}{2} \right) \text{ kJ}$$

$$= -11.5 \text{ kJ}$$

Option (B)

$$W = -P_{\text{ext}}[V_2 - V_1]$$

$$= -3[3-1]$$

$$= -6 \text{ kJ}$$

Option (C)

$$\Delta U = nC_v \Delta T$$

$$= 1 \times \frac{3}{2} \times \frac{8.314 \times 320}{1000} \text{ kJ}$$

$$= 3.99$$

Option (D)

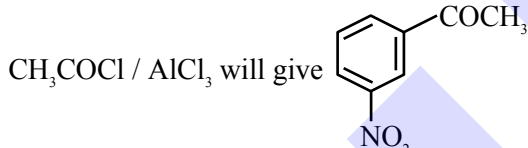
$$\Delta H = nC_p \Delta T$$

$$= 1 \times \frac{5}{2} \times \frac{8.314 \times 337}{1000} \text{ kJ}$$

$$= 7 \text{ kJ}$$

61. Given below are two statements :

Statement I : Benzene is nitrated to give nitrobenzene, which on further treatment with



Statement II : NO_2 group is a *m*-directing, and deactivating group.

In the light of the above statements, choose the most appropriate answer from the options given below.

- (1) Statement I is correct but Statement II is incorrect.
- (2) Both Statement I and Statement II are correct.
- (3) Statement I is incorrect but Statement II is correct.
- (4) Both Statement I and Statement II are incorrect.

Ans. (3)

Sol. Nitrobenzene does not give Friedel-Craft acylation since it is highly deactivated ring.

62. $A \rightarrow \text{products}$ (First order reaction).

Three sets of experiment were performed for a reaction under similar experimental conditions.

Run 1 \Rightarrow 100 mL of 10 M solution of reactant A

Run 2 \Rightarrow 200 mL of 10 M solution of reactant A

Run 3 \Rightarrow 100 mL of 10 M solution of reactant A + 100 mL of H_2O added.

The correct variation of rate of reaction is

(1) Run 1 = Run 2 = Run 3

(2) Run 3 < Run 1 = Run 2

(3) Run 3 < Run 1 < Run 2

(4) Run 1 < Run 2 < Run 3

Ans. (2)

Sol. For 1st order reaction

$$\text{Rate} = k[A]$$

with decrease in concentration of A, rate of reaction decreases.

63. Match the LIST-I with LIST-II

List-I Reagents		List-II Name of Reaction involving carbonyl compound	
A.	$\text{NH}_2 - \text{NH}_2, \text{KOH}$	I.	Tollen's Test
B.	$\text{Ag}(\text{NH}_3)_2\text{OH}$	II.	Clemmensen Reduction
C.	Aq. CuSO_4 , Sodium Potassium tartarate, KOH	III.	Wolff-Kishner Reduction
D.	$\text{Zn} - \text{Hg}, \text{HCl}$	IV.	Fehling's Test

Choose the **correct** answer from the options given below

(1) A-III, B-I, C-IV, D-II

(2) A-II, B-I, C-IV, D-III

(3) A-IV, B-III, C-II, D-I

(4) A-III, B-IV, C-I, D-II

Ans. (1)

Sol. Theoretical (NCERT Based)



Predict your JEE Main 1 2026 percentile

Try ALLEN's FREE Percentile Predictor

Check Now

64. Given below are two statements :

Statement I : The halogen that makes longest bond with hydrogen in HX, has the smallest covalent radius in its group.

Statement II : A group 15 element's hydride EH_3 has the lowest boiling point among corresponding hydrides of other group 15 elements. The maximum covalency of that element E is 4.

In the light of the above statements, choose the **correct** answer from the options given below.

- (1) Both Statement I and Statement II are true.
- (2) Statement I is false but Statement II is true.
- (3) Both Statement I and Statement II are false.
- (4) Statement I is true but Statement II is false.

Ans. (3)

Sol. $\text{HF} < \text{HCl} < \text{HBr} < \text{HI}$ (bond length order)

$\text{F} < \text{Cl} < \text{Br} < \text{I}$ (radius order)

$\text{PH}_3 < \text{AsH}_3 < \text{NH}_3 < \text{SbH}_3 < \text{BiH}_3$ (Boiling point order)

Maximum possible covalency of phosphorous is 6

65. Given below are two statements:

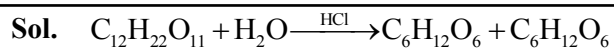
Statement I : Sucrose is dextrorotatory. However sucrose upon hydrolysis gives a solution having mixture of products. This solution shows laevorotation.

Statement II : Hydrolysis of sucrose gives glucose and fructose. Since the laevorotation of glucose is more than the dextrorotation of fructose the resulting solution becomes laevorotatory.

In the light of the above statements, choose the correct answer from the options given below.

- (1) Statement I is false but Statement II is true.
- (2) Both Statement I and Statement II are false.
- (3) Both Statement I and Statement II are true.
- (4) Statement I is true but Statement II is false.

Ans. (4)



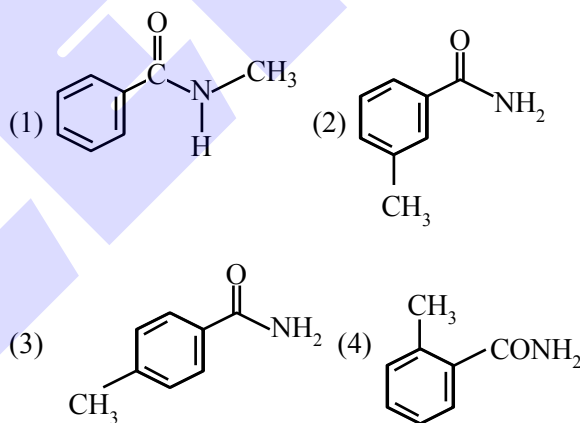
D- Glucose + D fructose

$$[\alpha]_{\text{D-sucrose}} = +66.5^\circ, [\alpha]_{\text{D-Glucose}} = +52.5^\circ,$$

$$[\alpha]_{\text{D-Fructose}} = -92.4^\circ$$


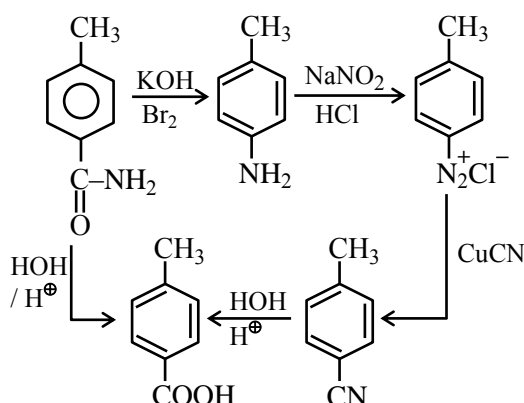
\Rightarrow Sucrose is dextrorotatory and hydrolysed product is laevorotatory.

66. 'A' is a neutral organic compound (M. F : $\text{C}_8\text{H}_9\text{ON}$). On treatment with aqueous Br_2/HO^- , 'A' forms a compound 'B' which is soluble in dilute acid. 'B' on treatment with aqueous $\text{NaNO}_2/\text{HCl}(0-5^\circ\text{C})$ produces a compound 'C' which on treatment with CuCN/NaCN produces 'D'. Hydrolysis of 'D' produces 'E' which is also obtainable from the hydrolysis of 'A'. 'E' on treatment with acidified KMnO_4 produces 'F'. 'F' contains two different types of hydrogen atoms. The structure of 'A' is



Ans. (3)

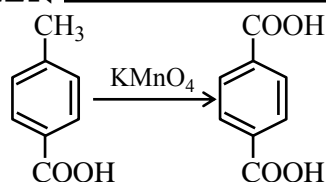
Sol.



Predict your JEE Main 1 2026 percentile

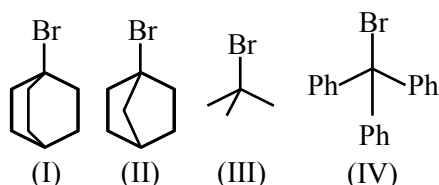
Try ALLEN's FREE Percentile Predictor

Check Now



67. The correct order of the rate of reaction of the following reactants with nucleophile by S_N1 mechanism is :

(Given : Structure I and II are rigid)



- (1) $IV < III < II < I$ (2) $III < I < II < IV$
(3) $II < I < III < IV$ (4) $I < II < III < IV$

Ans. (3)

Rate of $S_N1 \propto$ Stability of C^\oplus formed

(I) and (II) are unstable due to Bredt's rule, (I) has more +I effect.

$(II) < (I) < (III) < (IV)$

68. Two p-block elements X and Y form fluorides of the type EF_3 . The fluoride compound XF_3 is a Lewis acid and YF_3 is a Lewis base. The hybridization of the central atoms of XF_3 and YF_3 respectively are

- (1) Both sp^3 (2) sp^2 and sp^3
(3) sp^3 and sp^2 (4) Both sp^2

Ans. (2)

Sol. $XF_3 = BF_3$; sp^2
 $YF_3 = NF_3$; sp^3

69. As compared with chlorocyclohexane, which of the following statements correctly apply to chlorobenzene ?

- A. The magnitude of negative charge is more on chlorine atoms
B. The C – Cl bond has partial double bond character
C. C – Cl bond is less polar
D. C – Cl bond is longer due to repulsion between delocalised electrons of the aromatic ring and lone pairs of electrons of chlorine.

E. The C–Cl bond is formed using sp^2 hybridised orbital of carbon.

Choose the correct answer from the options given below :

- (1) A, C and E only (2) B, C and D only
(3) A, D and E only (4) B, C and E only

Ans. (4)

Sol. Chlorocyclohexane is more polar due to –I effect of –Cl,

Whereas chlorobenzene has $-I > +M$, so it is less polar & also has partial double bond character.

70. Given below are two statements:

Statement I : The Henry's law constant K_H is constant with respect to variations in solution's concentration over the range for which the solutions is ideally dilute.

Statement II : K_H does not differ for the same solute in different solvents.

In the light of the above statements, choose the **correct** answer from the options.

- (1) Statement I is false but Statement II is true.
(2) Statement I is true but Statement II is false.
(3) Both Statement I and Statement II are true.
(4) Both Statement I and Statement II are false.

Ans. (2)

Sol. K_H depends on the nature of gas and solvent.

SECTION-B

71. The cycloalkane (X) on bromination consumes one mole of bromine per mole of (X) and gives the product (Y) in which C:Br ratio is 3 : 1. The percentage of bromine in the product (Y) is _____ %. (Nearest integer)

(Given : Molar mass in $g\ mol^{-1}$ H : 1, C : 12, O : 16, Br : 80)

Ans. (66)

Sol. $C_6H_{10} \xrightarrow{Br_2} C_6H_8Br_2$

Molecular mass of $C_6H_8Br_2$ is :

$$12 \times 6 + 10 + 160$$

$$72 + 10 + 160 = 242$$

$$\% \text{ of Br} = \frac{160}{242} \times 100$$

$$\% \text{ of Br} = 66.11 \% \approx 66\%$$

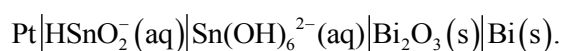


Predict your JEE Main 1 2026 percentile

Try ALLEN's FREE Percentile Predictor

Check Now

72. Consider the following electrochemical cell at 298K



If the reaction quotient at a given time is 10^6 , then the cell EMF (E_{cell}) is $\times 10^{-1}\text{V}$ (Nearest integer).

Given the standard half-cell reduction potential as

$$E_{\text{Bi}_2\text{O}_3/\text{Bi},\text{OH}^-}^0 = -0.44\text{V} \text{ and}$$

$$E_{\text{Sn}(\text{OH})_6^{2-}/\text{HSnO}_2^-,\text{OH}^-}^0 = -0.90\text{V}$$

Ans. (4)

Sol. $E_{\text{cell}}^0 = -0.44 - (-0.90)$
 $= +0.46\text{V}$

Applying Nernst equation :-

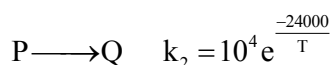
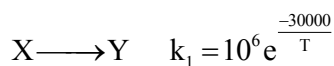
$$E_{\text{cell}} = E_{\text{cell}}^0 - \frac{0.06}{n} \log Q$$

$$E_{\text{cell}} = 0.46 - \frac{0.06}{6} \log 10^6$$

$$E_{\text{cell}} = 4 \times 10^{-1}$$

$$x = 4$$

73. The temperature at which the rate constants of the given below two gaseous reactions become equal is _____ K. (Nearest integer).



Given : $\ln 10 = 2.303$

Ans. (1303)

Sol. $10^4 e^{\frac{-24000}{T}} = 10^6 e^{\frac{-30000}{T}}$

$$e^{\frac{6000}{T}} = 100$$

$$\frac{6000}{T} = 2 \ln 10$$

$$T = \frac{6000}{2 \times 2.303}$$

$$T = 1302.64\text{K}$$

$$T \approx 1303\text{K}$$

74. Sodium fusion extract of an organic compound (Y) with CHCl_3 and chlorine water gives violet color to the CHCl_3 layer. 0.15g of (Y) gave 0.12 g of the silver halide precipitate in Carius method. Percentage of halogen in the compound (Y) is _____. (Nearest integer).

(Given : molar mass g mol^{-1} C : 12, H : 1, Cl : 35.5, Br : 80, I : 127)

Ans. (43)

Sol. Iodine gives violet colour

$$\% \text{ of I} = \frac{\text{Atomic weight of I}}{\text{Molecular weight of AgI}} \times \frac{m}{W} \times 100$$

$$= \frac{127}{235} \times \frac{0.12}{0.15} \times 100$$

$$\% \text{ of I} = 43.23\% \approx 43\%$$

75. Dissociation of a gas A_2 takes place according to the following chemical reactions. At equilibrium, the total pressure is 1 bar at 300K.



The standard Gibbs energy of formation of the involved substances has been provided below:

Substance	$\Delta G_f^\circ / \text{kJ mol}^{-1}$
A_2	-100.00
A	-50.832

The degree of dissociation of $\text{A}_2(\text{g})$ is given by $(x \times 10^{-2})^{1/2}$ where $x =$ _____.

(Nearest integer).

[Given : $R = 8\text{ J mol}^{-1}\text{K}^{-1}$, $\log 2 = 0.3010$, $\log 3 = 0.48$]

Ans. (33)

Sol. $-1.664 \times 10^3 = -8.3 \times 300 \ln K_p$

$$\ln K_p = 0.693$$


$$K_p = 2$$

$$2 = \frac{4\alpha^2 P_0}{1 - \alpha^2}$$

$$\alpha = \frac{1}{\sqrt{3}}$$

$$\alpha = \left(\frac{100}{3} \times 10^{-2} \right)^{1/2}$$

$$= (33.33 \times 10^{-2})^{1/2}$$



Predict your JEE Main 1 2026 percentile

Try ALLEN's FREE Percentile Predictor

Check Now


ALLEN

For Class 12th Pass Students

**RISE. REPEAT.
RANK UP IN JEE**

JOIN LEADER COURSE

JEE (Main+Adv.) 2027

 **26th Mar & 15th Apr**

AIR 1

JEE (Adv.) 2025

**Rajit Gupta
CLASSROOM**



Know more 

ALLEN ONLINE

Think **JEE 2027**
will be your **best shot?**

Join the **Leader Online Course!**

Win up to

90% scholarship 

via **ASAT**

Enrol Now



ALLEN ONLINE

Get REAL exam practice
for **JEE Main 2026**

with the

Major Online Test Series!



13 full-syllabus tests



100+ additional mock tests



50,000+ teacher-recommended Qs. & more

Buy Now

ALLEN

Get The Latest

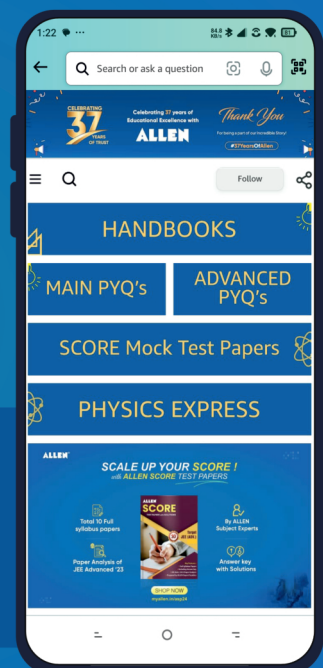
IIT-JEE Special Books
at Your Door Steps...!!

JOIN THE JOURNEY OF LEARNING

with

HANDBOOKS | ADVANCED-QB | SCORE PAPERS
PHYSICS EXPRESS | MAIN PYQ's | Adv. PYQ's

SHOP NOW



Available in
HINDI & ENGLISH